



5. $16 + 34 = \square$ tens

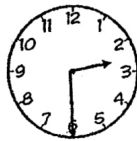
6. Each  stands for 1 unit.



The length of the bookmark is units.

7. It is half past 2.

Tick the clock below that shows the correct time.





2

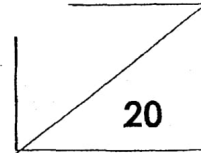
TAO NAN SCHOOL
MATHEMATICS HOLISTIC ASSESSMENT 2019
REVIEW 2

Name: _____

_()

Class: Pr 1 ()

Date: 21 August 2019




Parent's signature: _____

Duration: 45 minutes


Read the questions carefully.
Write the answer in the space provided.

1. Count the slices of watermelon below and write your answer in **words**.

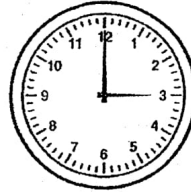



There are

slices of watermelon.



2. The clock shows the time Jane has her piano lesson.



Jane has her piano lesson at

3. Look at the numbers below.



The smallest number is

4.



$$29 - 16 =$$




8. Arrange the numbers below from the **greatest** to the **smallest**.




_____ / _____ / _____ / _____
greatest


9. At a flower shop, there are some roses and tulips as shown in the picture below.



There are flowers altogether.




10. Circle the shortest boy.



11. 7 tens 4 ones is 16 more than


12. Complete the number pattern below:

98, 95, 92, _____, 86, 83



13. Ali does his homework at

every evening.



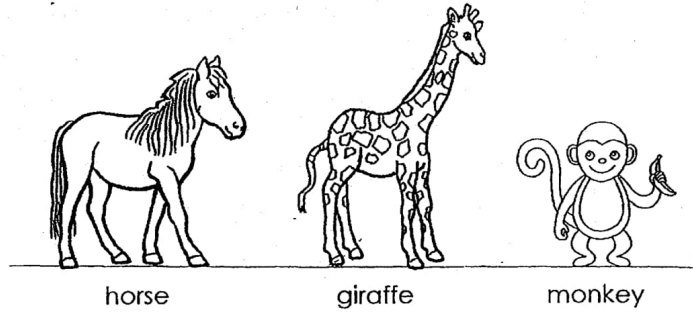
14.

4 3

+ 5 6



15. Fill in the blanks with 'taller' or 'shorter'.




The horse is _____ than the giraffe.

The horse is _____ than the monkey.

16. Circle the **greatest** number and **cross out** the **smallest** number in the box below.

12	47
	32
17	21



17. Eddy has 24 game cards. He has 8 fewer game cards than Fred. How many game cards does Fred have?


$$\square \ominus 8 = \square$$

Fred has game cards.

18. Mrs Wong has 33 stamps.
She has 15 stamps left after giving some to Mrs Lee.
How many stamps does she give to Mrs Lee?

$$\square \ominus \square = 15$$

She gives stamps to Mrs Lee.



19. Bala and Irwan have 39 toy blocks altogether.
Bala has 17 toy blocks. How many toy blocks does
Irwan have?

$$\square + \bigcirc = \square$$


Irwan has toy blocks.

20. Susan gave 22 stickers to her brother.
Then she had 14 stickers left.
How many stickers did she have at first?

$$\square - \bigcirc = \square$$

She had stickers at first.

End of Paper



[The main body of the page contains extremely faint, illegible text that appears to be bleed-through from the reverse side of the paper.]



SCHOOL : TAO NAN PRIMARY SCHOOL

LEVEL : PRIMARY 1

SUBJECT : MATH

TERM : 2019 REVIEW (2)

Q1) forty - eight

Q2) 30 o'clock

Q3) 37

Q4) 13

Q5) 5

Q6) 9


Q7)



Q8) 79, 65, 56, 38

Q9)30

Q10)





Q11) 58

Q12) 89

Q13) Half past 6

Q14) 99

Q15) Shorter , Taller

Q16) 47

Q17) $24 + 8 = 32$

Q18) $33 - 15 = 18$

Q19) $39 - 17 = 22$

Q20) $22 + 14 = 36$