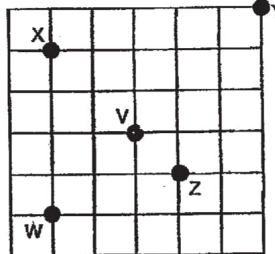




4 Shane is at Point V and facing north-east. Which point will he face after making a $\frac{3}{4}$ -turn clockwise?



- (1) W
- (2) X
- (3) Y
- (4) Z

()

5 There were 68 496 students watching the NE show. Express this number to the nearest thousand.

- (1) 68 000
- (2) 68 500
- (3) 69 000
- (4) 70 000

()

(Go on to the next page)



HENRY PARK PRIMARY SCHOOL
2019 TERM REVIEW 1
MATHEMATICS
PRIMARY 5

Name: _____ ()

Parent's Signature


Class: Primary 5 _____

Marks: _____

Section A	9
Section B	13
Section C	28
Total	50

Total Time: 1 hour 15 minutes

Do not turn over this page until you are told to do so.
Follow all instructions carefully.
Answer all questions.
You are not allowed to use a calculator.



SECTION A

Questions 1 to 5 carry 1 mark each. Questions 6 and 7 carry 2 marks each.
For each question, four options are given. One of them is the correct answer.
Make your choice (1, 2, 3 or 4) and write your answer in the bracket provided.

(9 marks)

1 Express three million, nine thousand, three hundred and two in numerals.

(1) 3 009 302

(2) 3 009 320

(3) 3 900 302

(4) 3 900 320

()

2 Find the value of $\frac{1}{5} + \frac{3}{10}$

(1) $\frac{1}{2}$

(2) $\frac{2}{5}$

(3) $\frac{4}{15}$

(4) $\frac{1}{3}$

()

3 Which digit in 52.81 is in the tenths place?

(1) 1

(2) 2

(3) 5

(4) 8

()

(Go on to the next page)



6 The total mass of 2 similar boxes of sweets and 2 similar boxes of chocolates is 24 kg. The mass of each box of sweets is thrice the mass of each box of chocolates. What is the mass of each box of sweets?

- (1) 3 kg
- (2) 6 kg
- (3) 9 kg
- (4) 12 kg

()

7 Mrs Tan made $1\frac{4}{5}$ l of lemonade. She poured the lemonade equally into 3 cups. Each cup contained $\frac{2}{5}$ l of lemonade. What was the amount of lemonade left?

- (1) $\frac{1}{5}$ l
- (2) $\frac{2}{5}$ l
- (3) $\frac{3}{5}$ l
- (4) $3\frac{3}{5}$ l

()

(Go on to Section B)



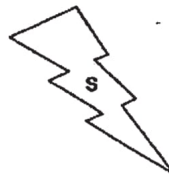

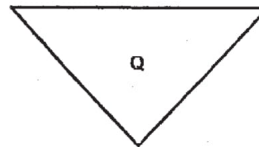
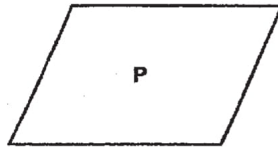
SECTION B

Questions 8 to 10 carry 1 mark each. Write your answers in the spaces provided. For questions which require units, give your answers in the units stated.

Do not write in this space

(3 marks)

8 Wendy drew four figures, P, Q, R and S as shown below.




Name all the figures above that have at least one line of symmetry.

Ans: _____

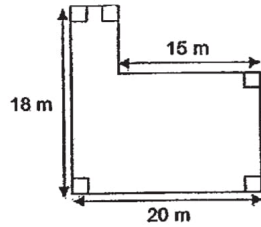
9 Express $\frac{1}{4}$ as a decimal.

Ans: _____

(Go on to the next page)



10 Find the perimeter of the following figure.



Do not write
in this space

Ans: _____ m

(Go on to the next page)



Questions 11 to 15 carry 2 marks each. Show your working clearly and write your answers in the spaces provided. For questions which require units, give your answers in the units stated.

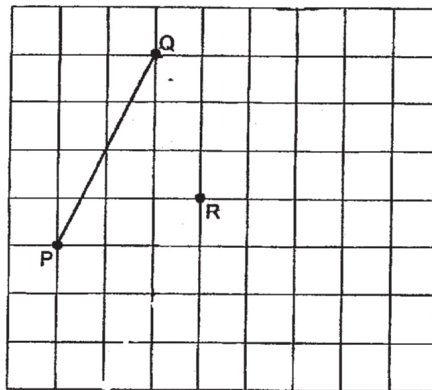
Do not write in this space

(10 marks)

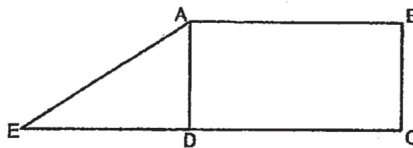
11 Find the value of 4.67×8 . Give your answer correct to 1 decimal place.

Ans: _____

12 a) Draw a line parallel to PQ that passes through point R.




b) In the figure below, ABCD is a rectangle, ADE is a triangle and CDE is a straight line. Name a pair of perpendicular lines.



Ans: Line _____ and _____

(Go on to the next page)



- 13 The sum of two numbers is 424. One of the numbers is 3 times the other number. What is the smaller number?

Do not write
in this space

Ans: _____

- 14 There are 30 balloons. $\frac{1}{6}$ of them are blue and $\frac{3}{5}$ of the remainder are red. How many red balloons are there?

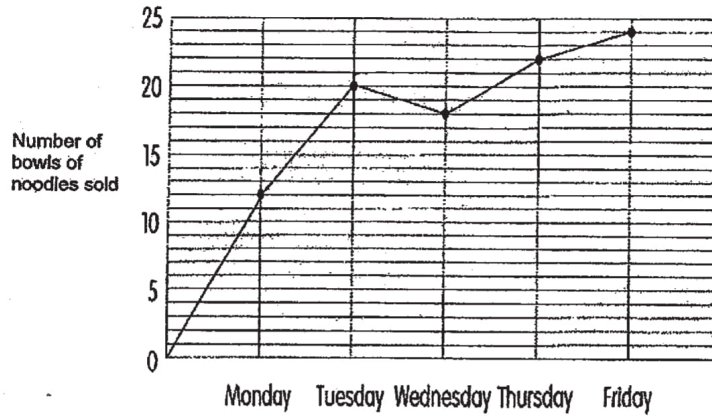
Ans: _____

(Go on to the next page)



15 The line graph below shows the number of bowls of noodles sold in a school canteen from Monday to Friday.

Do not write
in this space



How many more bowls of noodles were sold on Friday than on Wednesday?

Ans: _____

(Go on to Section C)



SECTION C

Questions 16 to 17 carry 2 marks each. Show your working clearly and write your answers in the spaces provided. For questions which require units, give your answers in the units stated.

Do not write
in this space

(4 marks)

- 16 Fill in each blank circle below with +, −, × or ÷ to make the equation correct.

$$(21 \bigcirc 3) \bigcirc 6 \times 4 = 12$$

- 17 Mr Osman drove from Singapore to Kuala Lumpur at 07 05. After driving for $1\frac{3}{4}$ h, he rested for 20 min before continuing his journey for another 2 h 35 min. At what time did he reach Kuala Lumpur?

Ans: _____ a.m.

(Go on to the next page)

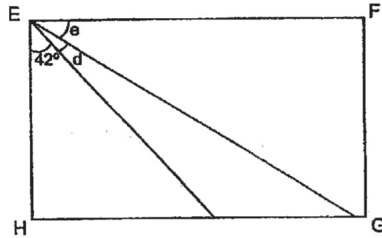


For questions 18 to 23, show your working clearly and write your answers in the spaces provided. The number of marks available is shown in brackets [] at the end of each question and part-question.

Do not write
in this space

(24 marks)

18 EFGH is a rectangle. Given that $\angle e$ is twice the size of $\angle d$, find $\angle e$.



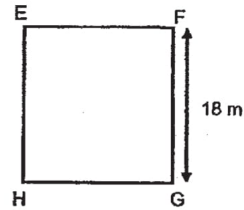

Ans: _____ [3]

(Go on to the next page)



19 Rectangle ABCD has the same area as square EFGH.
Find the perimeter of rectangle ABCD.

Do not write
in this space



Ans: _____ [4]

(Go on to the next page)



- 20 Mrs Deng bought 258 identical Rubik's cubes.
Mrs Fan bought 249 such Rubik's cubes.
Mrs Fan also bought 76 identical game sets at \$12 each.
In the end, Mrs Fan spent \$777 more than Mrs Deng.
How much did Mrs Deng pay for 258 Rubik's cubes?

Do not write
in this space

Ans: _____ [5]

(Go on to the next page)




- 21 Cassandra had 5 times as many beads as Sharmaine at first. After Cassandra gave away 648 beads and Sharmaine received 216 beads, they had the same number of beads in the end. How many beads did Cassandra have at first?

Do not write
in this space

Ans: _____ [3]

(Go on to the next page)



- 22 Pencil boxes cost \$15 each. Calculators cost \$24 each.
Kelly bought a total of 100 pencil boxes and calculators for \$2130.
How many pencil boxes did she buy?

Do not write
in this space

Ans: _____ [4]

(Go on to the next page)



23 Bala, Mei Ling, Kelvin and Devi shared \$1320.

Mei Ling received $\frac{1}{6}$ of the total amount of money.

Devi received $\frac{1}{4}$ of the total amount of money received by Bala and Kelvin.

Kelvin received 3 times as much money as Bala.

How much did Kelvin receive?

Do not write
in this space

Ans: _____ [5]

End of Paper

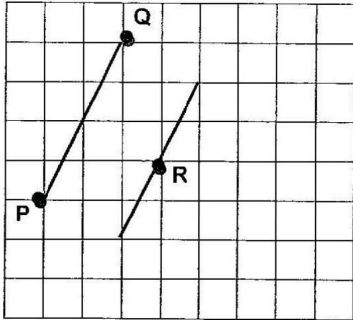



SCHOOL : HENRY PARK PRIMARY SCHOOL
LEVEL : PRIMARY 5
SUBJECT : MATH
TERM : 2019 CA1

PAPER 1 BOOKLET A

Q 1	Q2	Q3	Q4	Q5	Q6	Q7
1	1	4	2	1	3	3

SECTION B

Q8)	Figure Q and R
Q9)	0.25
Q10)	76m
Q11)	37.4
Q12)	a)  b)AD and DE
Q13)	106
Q14)	$30 \div 6 = 5$ $5 \times 5 = 25$ $25 \div 5 = 5$ $3 \times 5 = 15$



Q15)	$24 - 18 = 6$
------	---------------

SECTION C

Q16)	$(21 \times 3) - 6 \times 4 = 39 \times$ $(21 - 3) \div 6 \times 4 = 12 \checkmark$
Q17)	1h 45 min after 0705 is 0850 10 min after 0850 is 0900 2h 45min after 0900 is 11.45a.m.
Q18)	$90 - 42 = 48$ $48 \div 3 = 15$ $16 \times 2 = 32^\circ$
Q19)	$18 \times 18 = 324$ $324 \div 9 = 36$ $36 + 36 + 9 + 9 = 90m$
Q20)	$258 - 249 = 9$ $76 \times 12 = 912$ $912 - 777 = 135$ $135 \div 9 = 15$ $258 \times 15 = \$3870$
Q21)	$648 + 216 = 864$ $864 \div 4 = 216$ $216 \times 5 = 1080$
Q22)	$100 \times 24 = 2400$ $2400 - 2130 = 270$ $270 \div 9 = 30$
Q23)	$\$1320 \div 6 = 220$ $220 \times 5 = 1100$ $1100 \div 5 = 220$ $3 \times 220 = \$660$