



## Section B (10 marks)

Questions 6 to 10 carry 2 marks each.

Show your working clearly and write your answers in the spaces provided.

For questions which require units, give your answers in the units stated.

6. What is the missing number in the number pattern below?

626, 617, \_\_\_\_\_, 599, 590, 581

Ans: \_\_\_\_\_

7. Find the value of  $8 \times 7$ .

Ans: \_\_\_\_\_

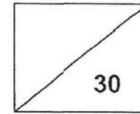
8. What is the missing number?

\_\_\_\_\_ - 400 = 1489

Ans: \_\_\_\_\_



Maha Bodhi School  
2019 Math Review 1  
Primary 3  
Mathematics



Name: \_\_\_\_\_ (       )

Class: Primary 3

Duration: 40 minutes

Parent's Signature: \_\_\_\_\_

---

### Section A (10 marks)

Questions 1 to 5 carry 2 marks each.

For each question, four options are given. One of them is the correct answer.

Make your choice (1, 2, 3 or 4) and write your choice in the bracket (       ) provided.

1. What is the value of the digit 1 in 8192?


- (1) 1
- (2) 10
- (3) 100
- (4) 1000

(       )

2. Find the sum of 1368 and 4385.

- (1) 5643
- (2) 5653
- (3) 5743
- (4) 5753

(       )



**Dr.Kenny Education**



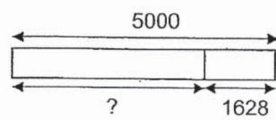


3. What is the quotient when 46 is divided by 7?

- (1) 8
- (2) 6
- (3) 5
- (4) 4

(      )

4. Study the model below.  
Find the missing number.



- (1) 3372
- (2) 3382
- (3) 3472
- (4) 3482


(      )

5. What is the missing digit in the box?

$$\begin{array}{r} 2 \boxed{?} 7 \\ \times \quad \quad 4 \\ \hline 9 \ 4 \ 8 \end{array}$$

- (1) 1
- (2) 2
- (3) 3
- (4) 4

(      )



9. Tim has 1532 stickers.  
He has 741 fewer stickers than Paul.  
How many stickers does Paul have?

Ans: \_\_\_\_\_ stickers

10. When a number is divided by 9, it has a remainder of 5.  
The number is between 20 and 30.  
What is the number?

Ans: \_\_\_\_\_



## Section C (10 marks)

Questions 11 and 12 carry 3 marks each.

Question 13 carries 4 marks.

Show your working clearly and write your answers in the spaces provided. The number of marks available is shown in brackets [ ] at the end of each question or part-question.

11. There are 2066 girls and 3349 boys in a school.  
1890 pupils in the school wear spectacles.  
How many pupils do not wear spectacles?


Ans: \_\_\_\_\_ [3]

5

3 / 3



12. Mervyn wants to pack 34 donuts into boxes.  
He can pack at most 4 donuts in each box.  
What is the least number of boxes needed to pack all the donuts?



Ans: \_\_\_\_\_ [3]



13. Ali has 147 stamps.  
Chong Li has 58 fewer stamps than Ali.  
Bala has 3 times as many stamps as Ali.  
(a) How many stamps does Chong Li have?  
(b) How many stamps does Bala have?

Ans: (a) \_\_\_\_\_ [2]

(b) \_\_\_\_\_ [2]


----- The End -----



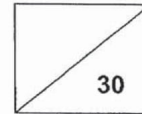
**Remember to check your work!**

*This is property of Maha Bodhi School.*

*No part of this should be duplicated without the permission of Maha Bodhi School.*



Maha Bodhi School  
 2019 Mathematics Review 2  
 Primary 3  
 Mathematics



Name: \_\_\_\_\_ (       )

Class: Primary 3 \_\_\_\_\_

Duration: 40 minutes

Parent's Signature: \_\_\_\_\_

**Section A (10 marks)**

Questions 1 to 5 carry 2 marks each.

For each question, four options are given. One of them is the correct answer.


Make your choice (1, 2, 3 or 4) and write your choice in the bracket (       ) provided.

1. What is the amount of money shown below?



- (1) \$24.10
- (2) \$24.80
- (3) \$25.10
- (4) \$25.60

(       )



**Dr.Kenny Education**



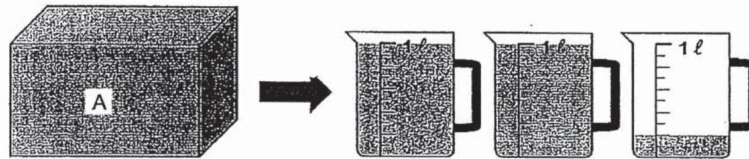


2. 3 km 2 m = \_\_\_\_\_ m

- (1) 302
- (2) 320
- (3) 3002
- (4) 3020

(       )

3. Container A is completely filled with water.  
All the water in Container A is emptied into measuring jugs.  
Find the capacity of Container A.



- (1) 2010 ml
- (2) 2020 ml
- (3) 2100 ml
- (4) 2200 ml


(       )

4. Ming Feng has \$25.  
She wants to buy two soft toys that cost \$13.10 each.  
How much more money does she need?

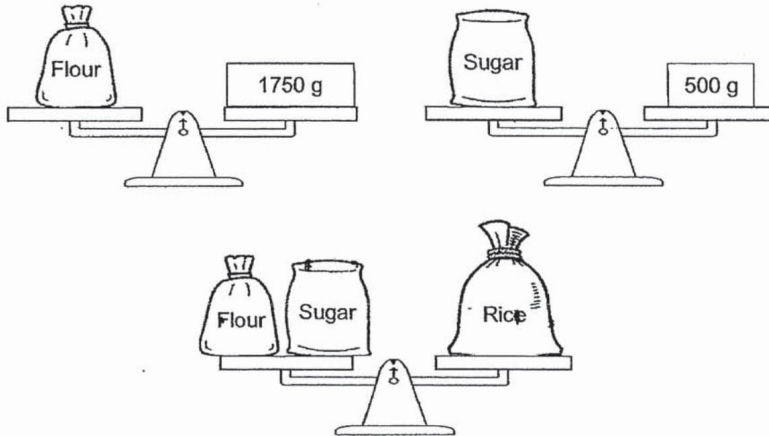
- (1) \$1.20
- (2) \$11.90
- (3) \$26.20
- (4) \$38.10

(       )

/6



5. Study the weighing scales below carefully.



What is the mass of two bags of rice?

- (1) 1 kg 250 g
- (2) 2 kg 250 g
- (3) 2 kg 500 g
- (4) 4 kg 500 g

( )



## Section B (10 marks)

Questions 6 to 10 carry 2 marks each.

Show your working clearly and write your answers in the spaces provided.

For questions which require units, give your answers in the units stated.

6. What is the total value of 7 fifty-cent coins and 2 twenty-cent coins?

Ans: \$ \_\_\_\_\_


7. The table below shows the mass of four fruits.

Fruit	Mass
Orange	560 g
Mango	800 g
Durian	2 kg
Pineapple	1 kg

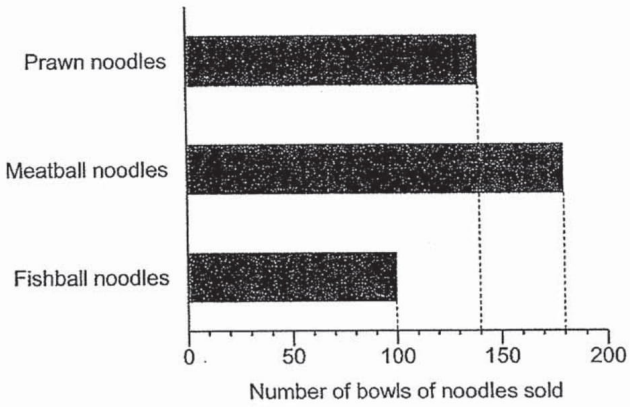
What is the difference in the mass between a pineapple and a mango?

Ans: \_\_\_\_\_ g

14




8. The graph below shows the number of bowls of noodles Mr Toh sold in a day.







How many bowls of noodles did he sell in all?

Ans: \_\_\_\_\_ bowls



9. Look at the advertisement below.

 Bag \$14.90	 Book \$8.25	 Sharpener \$12.90	 Pencil case \$7.25
---	---	---	--

Meiling paid \$21.15 for two different items from the above.

Which two items did she buy?

Ans: \_\_\_\_\_ and \_\_\_\_\_

10. Mrs Ong needs 1 litre of orange juice.

At a supermarket, orange juice is sold in 300 ml bottles.

What is the **least** number of bottles of orange juice Mrs Ong needs to buy?

Ans: \_\_\_\_\_ bottles



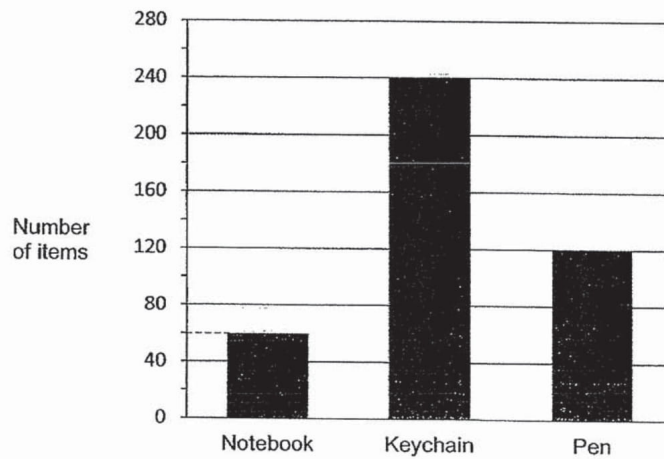
**Section C (10 marks)**

Questions 11 and 12 carry 3 marks each.

Question 13 carries 4 marks.

Show your working clearly and write your answers in the spaces provided. The number of marks available is shown in brackets [ ] at the end of each question or part-question.

11. The bar graph below shows the number of items Mr Chew sold.



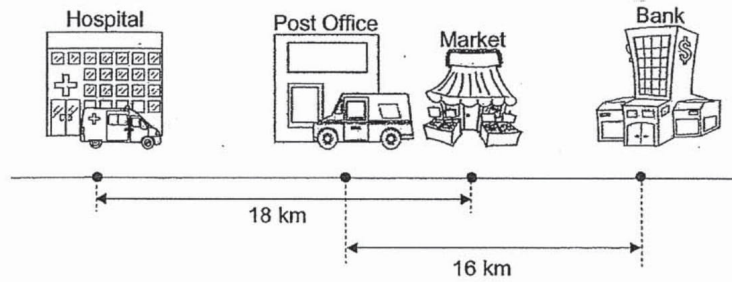
- a) Mr Chew sold twice as many pens as this item. Which item was this?
- b) Each keychain cost \$2. How much money did Mr Chew collect from selling all the keychains?

Ans: (a) \_\_\_\_\_ [1]

(b) \_\_\_\_\_ [2]



12.



The hospital is 18 km away from the market. The distance from the hospital to the post office is twice the distance from the post office to the market. The post office is 16 km away from the bank.

- (a) How far is the post office from the hospital?
- (b) How far is the bank from the hospital?

Ans: (a) \_\_\_\_\_ [2]

(b) \_\_\_\_\_ [1]



13. 1 bag and 1 skateboard cost \$49.70.  
1 bag and 2 skateboards cost \$74.90.

(a) How much does a bag cost?

(b) John wants to buy 2 bags and 3 skateboards. He has \$80.  
How much more money does he need?

Ans: (a) \_\_\_\_\_ [2]

(b) \_\_\_\_\_ [2]


----- The End -----



**Remember to check your work!**

*This is the property of Maha Bodhi School.*

*No part of this should be duplicated without the permission of Maha Bodhi School.*



**Dr.Kenny Education**



**ANSWER KEY**

YEAR : 2019  
LEVEL : PRIMARY 3  
SCHOOL : MAHA BODHI SCHOOL  
SUBJECT : MATHEMATICS  
TERM : REVIEW 1

**SECTION A**

Q1	Q2	Q3	Q4	Q5
3	4	2	1	3

**SECTION B**

- (6) 608
- (7) 56
- (8) 1889
- (9) 2273
- (10) 23
- (11) 3525
- (12) 9
- (13a) 89
- (13b) 441



ANSWER KEY

YEAR : 2019  
LEVEL : PRIMARY-3  
SCHOOL : MAHA BODHI SCHOOL  
SUBJECT : MATHEMATICS  
TERM : REVIEW 2

SECTION A

Q1	Q2	Q3	Q4	Q5
3	3	4	1	4

SECTION B

- (6) \$3.90
- (7) 200g
- (8) 420
- (9) Book and Sharpener
- (10) 4
- (11a) Notebook
- (11b) \$480
- (12a) 12km
- (12b) 28km
- (13a) \$24.50
- (13b) \$44.60

2  
END