


11.      4   □   5  
      + 2   8   6  
      -----  
      7   3   1  
      -----

What is the missing digit in the box?

- 1) 5
- 2) 2
- 3) 7
- 4) 4

(     )

12. Yoshio started eating his lunch at 12 noon.  
He took 30 minutes to finish eating.  
At what time did he finish eating his lunch?



- 1) 11.30 a.m.
- 2) 12.30 a.m.
- 3) 11.30 p.m.
- 4) 12.30 p.m.

(     )

13. David bought 4 boxes of muffins. There were 8 muffins in each box.  
How many muffins did David have?

- 1) 12
- 2) 2
- 3) 32
- 4) 4

(     )



Anglo-Chinese School (Junior)  
Primary Two Mathematics SA2

Revision Paper 1A

Name: \_\_\_\_\_ ( )

Class: 2.( )

Date: \_\_\_\_\_

### Section A

For each question, four options are given. One of them is the correct answer. Make your choice and write its number (1, 2, 3 or 4) in the brackets provided.

1. What is five hundred and eighty-seven in numerals?

- 1) 578
- 2) 580
- 3) 587
- 4) 597

( )

2. 10 tens + 7 ones = \_\_\_\_\_

- 1) 17
- 2) 107
- 3) 170
- 4) 1007

( )

3. \_\_\_\_\_ is greater than 273 but smaller than 327.

- 1) 237
- 2) 271
- 3) 325
- 4) 372

( )

4. Find the sum of 154 and 631.

- 1) 317
- 2) 477
- 3) 767
- 4) 785

( )



5. 7 fours is the same as \_\_\_\_\_.

- 1)  $7 + 4$
- 2)  $4 + 4 + 4 + 4$
- 3)  $4 + 4 + 4 + 4 + 4 + 4 + 4$
- 4)  $7 \times 7 \times 7 \times 7$

( )

6. 450¢ is the same as \_\_\_\_\_.

- 1) \$0.45
- 2) \$4.50
- 3) \$4.05
- 4) \$450

( )

7. James, Peter, Henry and Lincoln went shopping. Each of them bought one of the toys shown below. Who spent the least amount of money?



Peter



Henry



James



Lincoln

- 1) James
- 2) Peter
- 3) Henry
- 4) Lincoln

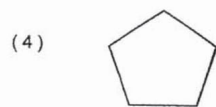

( )




8. Alicia read some books in 16 days. She took 4 days to read each book.  
How many books did she read altogether?

- 1) 20
- 2) 12
- 3) 5
- 4) 4

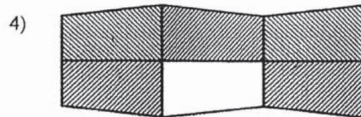
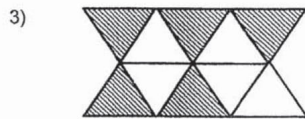
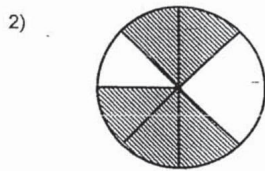
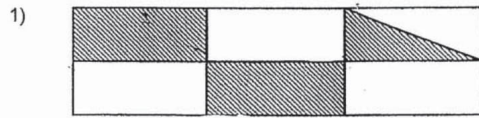
9. Look at the shapes below.  
Which shape has both curves and straight lines?



( )  
/



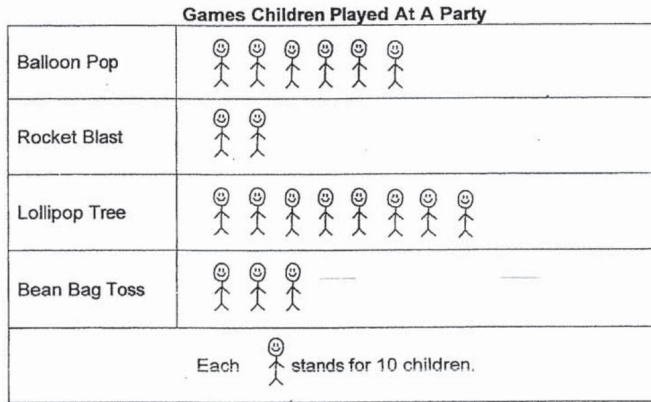
10. Which of the following figures has  $\frac{5}{10}$  of its shape shaded?



( )



The picture graph below shows the number of children who play games at a party. Study the graph and answer Question 14.

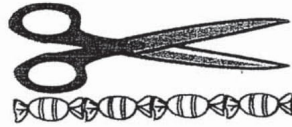
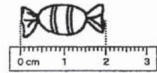


14. How many children played Rocket Blast and Lollipop Tree?

- 1) 80
- 2) 100
- 3) 110
- 4) 140


(     )

15. A sweet is 2 cm long. A pair of scissors is as long as 4 sweets.  
The total length of 2 pairs of scissors is \_\_\_\_\_ cm.

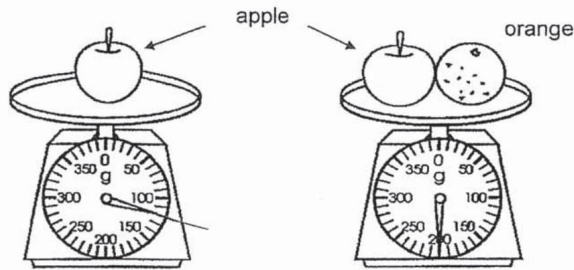


- 1) 16
- 2) 10
- 3) 8
- 4) 4

(     )



16. Look at the pictures below.



Find the mass of the orange.

- 1) 40 g
- 2) 80 g
- 3) 120 g
- 4) 200 g

( )

17. Tristan bought some pens. 3 pens cost \$8. How much would 6 such pens cost?

- 1) \$16
- 2) \$18
- 3) \$24
- 4) \$48

( )

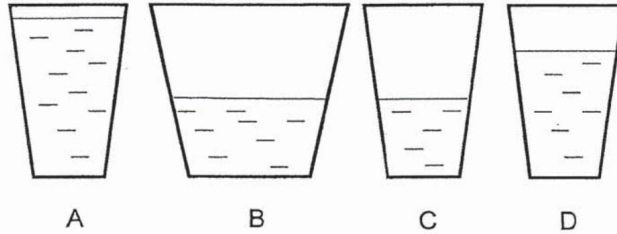
18. Karen had 20 pencils and some erasers. She packed 5 pencils and 2 erasers in each goodie bag. How many erasers did Karen pack in all the goodie bags?

- 1) 5
- 2) 2
- 3) 7
- 4) 8

( )



19. Containers A, C and D are similar containers.  
Which container has the least amount of water?



- 1) A
- 2) B
- 3) C
- 4) D

( )

20. What comes next in the pattern below?



- 1)
- 2)
- 3)
- 4)

( )



Anglo-Chinese School (Junior)  
Primary Two Mathematics SA2

Revision Paper 1B

Name: \_\_\_\_\_ ( )


Class: 2.( )

Date: \_\_\_\_\_

### Section B

Show your working clearly and write your answers in the boxes provided. For questions which require units, give your answers in the units stated.

1. Arrange the numbers in order. Begin with the smallest.



--	--	--	--

Smallest

2. The sum of two numbers is 796. One of the numbers is 344. What is the other number?



3. Find the answers for the sums below.


$$\begin{array}{r} \text{(a)} \quad 4 \ 9 \ 6 \\ + \quad 7 \ 8 \\ \hline \\ \hline \end{array}$$


$$\begin{array}{r} \text{(b)} \quad 2 \ 0 \ 7 \\ + \quad 1 \ 8 \ 6 \\ \hline \\ \hline \end{array}$$

4. Yummy Bakery baked 900 cakes on Monday. 121 of them were cheese cakes and the rest were chocolate cakes. How many chocolate cakes were baked?

5.  $1 - \frac{3}{7} =$  \_\_\_\_\_

6. How many **more** boxes must be shaded so that  $\frac{5}{8}$  of the figure is shaded?






7. Jimmy has two \$50 notes, three \$10 notes and some coins shown below. How much money does he have altogether?



\$


8. What is  $10 \times 10$ ?

9. Eric has 40 sweets. He packs the sweets into bags. There are 5 sweets in each bag. How many bags does he need to pack all the sweets?

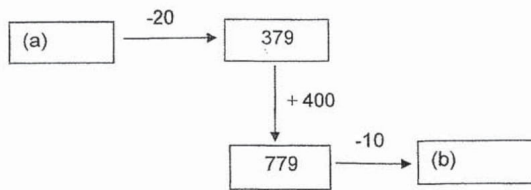



10. When all the numbers in the  are added up, the answer is the

same as  $4 \times \square$ . What is the missing number in the box?



11. Fill in the boxes with the missing number.






12. Vansen left for school at 6.30 a.m.  
He took half an hour to walk from his house to school.




- (a) At what time did Vansen reach school?

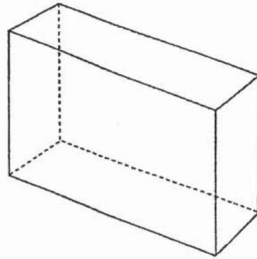
- (b) Ron reached school 1 hour later than Vansen. At what time did Ron reach school?

13. What is the volume of water in the container?





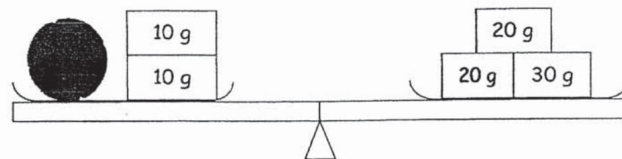
14. Look at the cuboid below. How many flat surfaces does it have?



15. Write a division equation based on the pictures below.

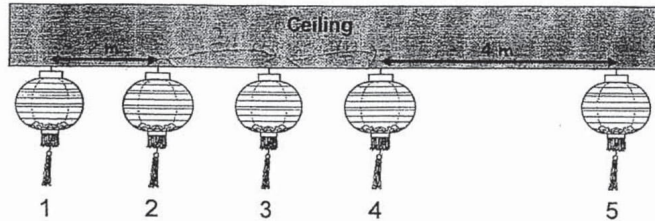


16. What is the mass of 1 tennis ball?

 g



17. Sally hung 5 lanterns from a ceiling. She placed Lanterns 1 to 4 **equally** apart from each other as shown in the diagram below. Study the diagram and answer the questions below.



- (a) What was the distance between lantern 1 and lantern 4?


 m

- (b) Lantern 5 was placed 4 m away from Lantern 4.  
What was the distance between lantern 1 and lantern 5?

 m



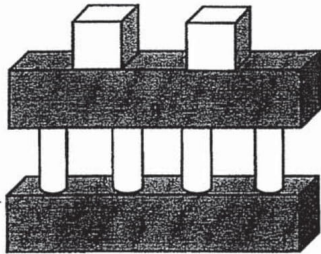
18. 3 cups of water can fill a jug completely. 24 cups of water can fill a tank completely. How many jugs of water are needed to fill the tank?



19. Mrs Tan bought 5 packets of cookies. There were 8 cookies in each packet. All the cookies were shared equally by her 4 children. How many cookies did each child get?



20. Circle the name of the object that was not used to form the figure below.



Name of Object
Cube
Cuboid
Cone
Cylinder

21. I am a 3-digit number.  
The digit in the tens place is the number just after zero.  
The digit in the hundreds place is 1 less than 10 and the digit in the ones place is 4 more than the digit in the tens place.  
What number am I?





22. The picture graph below shows the number of goals 5 teams scored for a few soccer matches. The total score for the 5 teams is 54. Use the information given below to complete the graph.

Team E scored 2 more goals than Team B.

Team C scored the least number of goals.

Number of goals scored by 5 teams





**Dr.Kenny Education**



ANSWER KEY

LEVEL : PRIMARY 2  
SCHOOL : ANGLO-CHINESE SCHOOL (JUNIOR)  
SUBJECT : MATHEMATICS  
TERM : SA2 REVISION PAPER 1

A

Q1	Q2	Q3	Q4	Q5	Q6	Q7	Q8	Q9	Q10
3	2	3	4	3	2	1	4	1	3
Q11	Q12	Q13	Q14	Q15	Q16	Q17	Q18	Q19	Q20
4	4	3	2	3	2	1	4	3	3

B

Q1) 356, 435, 536, 543

smallest

Q2) 452

Q3)

$$\begin{array}{r} (a) \quad \begin{array}{r} 495 \\ + 78 \\ \hline 574 \end{array} \end{array}$$

$$\begin{array}{r} (b) \quad \begin{array}{r} 207 \\ + 186 \\ \hline 393 \end{array} \end{array}$$

Q4) 779

Q5)  $\frac{4}{7}$

Q6) 4

Q7) (\$131.45)

$$100 + 30 + 1.45 = 131.45$$

Q8) 100

Q9) 8

Q10) (9)

Sum of No. = 36

$$36 = 4 \times 9$$

Q11) 399

769

Q12) a) 7.00 a.m.

b) 8.00 a.m.

Q13) 8 p

Q14) 6

$$Q15) 12 \div 3 = 4$$

Q16) 50 g

Q17) a) (6m)

$$2 \times 3 = 6$$

b) (10m)

$$6 + 4 = 10$$

Q18) (8)

$$24 \div 3 = 8$$



Q19) ( 10 )

$$5 \times 8 = 40$$

$$40 \div 4 = 10$$

Q20) Cone

Q21) 915

Q22) Total no. of cone =  $54 \div 2 = 27$

No of cone for ,

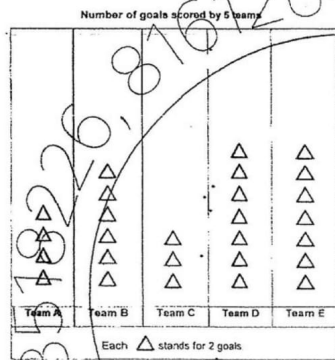
A: 4

B: 6

C: 3

D: 7

E: 7



THE END

81612644, 93858586  
Free Dell