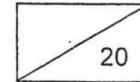


Nan Hua Primary School
Primary 2 Mathematics Worksheet
Term 3 Test 1 – 2B Units 1 and 2

Name: _____ ()

Marks:



Class: Primary 2 ()

Date:

Parent's signature : _____

A. Read the instructions and answer the questions carefully.
(1 mark each)

1. $3 + 3 + 3 + 3 + 3 + 3 + 3 =$ groups of 3

2. $27 \div 3 =$

3. $9 \times 4 =$

4. $\times 4 = 28$

5. $3 \times 4 =$ $\times 3$

6. $\times 4 = 3 \times 8$

7. $32 \div 4 =$

8. $\div 4 = 5$



B. Fill in the boxes with the correct answers. (2 marks each)

9. Fill in the boxes with the correct answers.

(a) + 475 = 789


(b) 138 + 63 =

10. Find the missing number.

 × 3 = 12

 ×  =

11. The picture below shows 6 groups of ice-cream cones.
Write a **division equation** for the picture below and complete the sentence.



÷ =

Each group has ice-cream cones.




- C. Read the following word problems carefully.
Show your equations, workings and models clearly.
Complete the answer statements. (3 marks each)

12. Mary bought 5 boxes of pencils.
There were 3 pencils in each box.
How many pencils did she buy altogether?

-
13. There are 242 children at a fun fair.
There are 97 more adults than children.
How many people are there at the fun fair altogether?

~ End of paper ~



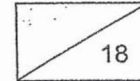
Nan Hua Primary School
Primary 2 Mathematics
Term 3 Test 2 – 2B Units 3, 4 and 5

Name: _____ ()

Class: Primary 2 ()

Date: _____

Marks:



Parent's signature: _____

A: Read the instructions and answer the questions carefully.
(1 mark each)


1. Count and write the correct amount in the box below.

\$ _____

2. Bala spends \$2.60.

\$2.60 is dollars and cents.

3. $165 \text{ ¢} = \$$



4. Arrange the following items in order.
Begin with the cheapest item.



Doll
\$27



Book
\$16





Cap
\$18

, ,


cheapest item

- 5.


	
Toy car	Toy boat
\$16	\$23




How much cheaper is the toy car than the toy boat?

The toy car is \$ cheaper than the toy boat.





6. Tick (✓) the shapes that you can find in the figure below.



Shapes		
 circle	 semicircle	 quarter circle

7. This picture is formed by joining 4 quarter circles.
Draw dotted lines to show these 4 quarter circles.



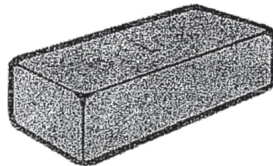


8. Look at the figures below.

Circle the figure(s) that are made up of **both straight lines and curves**.




9. What 3D shape is the brick shown below?



Tick (✓) the box with the correct answer below.


cone	<input type="checkbox"/>
cuboid	<input type="checkbox"/>
cylinder	<input type="checkbox"/>




10. Which one of the following object is a sphere? Circle it.






11. The figure below is made up of cuboids and cones.



There are more cones than cuboids.



12. Which set (A, B or C) has the **most** amount of money?
Tick (✓) the box with the correct answer below.

<p>Set A</p> 	
<p>Set B</p> 	
<p>Set C</p> 	



Match the objects to the correct amount of money.

13.



180 ¢

• 90¢ + 80¢

• 50¢ + 70¢

14.




\$1

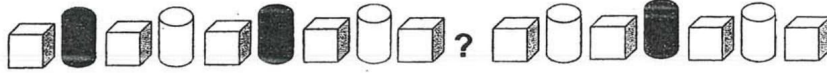
100¢

• 120¢ + 60¢

• 30¢ + 70¢

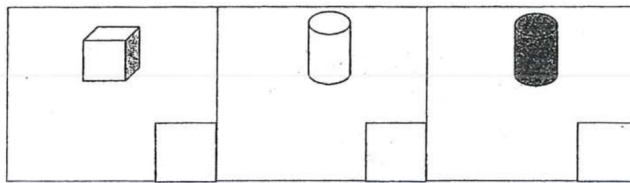


15. Study the pattern below carefully.







What is the missing shape in the above pattern?

Tick (✓) the box with the correct answer.



16. Tick (✓) on the solids that can roll.




- B:** Read the following word problems carefully.
Show your equations, workings and models clearly.
Write your answer statement. (2 marks)

17. The following picture shows the price of movie tickets.

A black and white clapperboard with the text 'Movie Tickets' and a price list. The clapperboard has a striped top section and a solid black bottom section with white text.

Movie Tickets	
Adult	\$10
Child	\$6

Mr. and Mrs. Lim took their 2 children to watch a movie.
How much did they pay altogether?





Nan Hua Primary School
Primary 2 Mathematics
Term 1 Review (Unit 1 – 2)

Name: _____ ()

Class: Primary 2 ()

Date: _____

Marks:

20

Duration: 30 minutes

Parent's Signature: _____

A. Fill in the boxes with the correct answers. (1 m each)

1. Write **three hundred and eighty-nine** in numerals.

2. $200 + \text{[]} \text{ tens} + 15 \text{ ones} = 275$

3. Arrange these numbers in order.
Begin with the smallest number.

255 , 172 , 249

<input type="text"/>	,	<input type="text"/>	,	<input type="text"/>
----------------------	---	----------------------	---	----------------------

smallest

4. What number is 10 less than 506?

The number is :

5. $734 + 142 = \text{[]}$

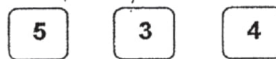


6. $877 - 406 = \square$

7. $458 + 293 = \square$

8. $535 - 189 = \square$

9. You are given the three number cards below.



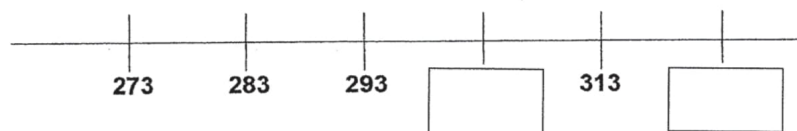
Arrange these cards to form the greatest number that is less than 500.

The greatest number is

10. There are even numbers from 135 to 147.

B. Fill in the boxes with the correct answers. (2 m each)

11. What are the 2 missing numbers?



12. - 339 = 474




C. Read the following word problems carefully.
Show your equations, workings and models clearly.
Complete the answer statements. (3 m each)


13. Darren has 135 stickers.
Mary gives him another 48 stickers.
How many stickers does Darren have now?

Darren has stickers now.

14. Andy has 546 marbles.
He has 167 more marbles than Jane.
How many marbles does Jane have?



Jane has marbles.





Nan Hua Primary School
Primary 2 Mathematics Worksheet
Term 2 Test - Units 5 and 6

Name: _____ () Class: Primary 2 ()

Date: _____ Marks:

20

Parent's Signature: _____

A. Read the instructions and answer the questions carefully.
(1 mark each)

1. $6 \times 2 =$

2. $5 \times 10 =$

3. $7 \times 5 =$

4. $20 \div 5 =$


5. $80 \div 10 =$

6. 3×5 is the same as $\times 3$

7. $8 + 8 + 8 + 8 + 8$ is the same as groups of 8.

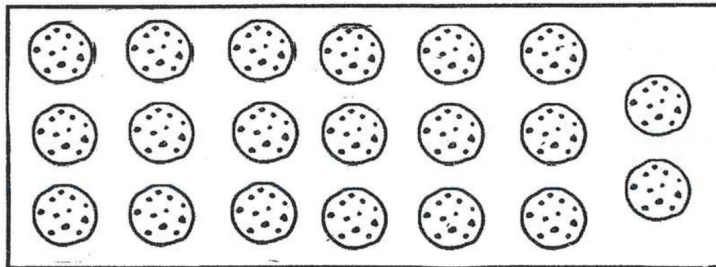


8. Share 12 bananas equally between 2 monkeys.




$$12 \div 2 = \square$$

9. Circle the cookies to show groups of 10.



10. Write a multiplication equation to show the total number of bees in the pictures below.



$$\square \times \bigcirc = \square$$



B. Fill in the boxes with the correct answers. (2 marks each)

11. Bala saves \$2 each day.


How much will he save in 7 days?

$$\boxed{} \times \boxed{} = \boxed{}$$

He saves \$ in 7 days.

12. The picture below shows 5 groups of butterflies.

Write a **division equation** for the picture below and complete the sentence.



$$\boxed{} \div \boxed{} = \boxed{}$$

Each group has butterflies.



Read the following word problems carefully.
Show your equations, workings and models clearly.
Complete the answer statements. (3 marks each)

13. There are 6 baskets.

Each basket has 5 watermelons.


How many watermelons are there in all?

There are _____ watermelons in all.

14. 40 stamps are shared equally among 4 friends.

How many stamps did each friend receive?

Each of them received _____ stamps.



Dr.Kenny Education



ANSWER KEY

2x y: 98
~~PRIMARY SE~~
~~NTICS~~
IST 1, 2

Q1) $3+3+3+3+3+3+3 = 7 \text{ groups of } 3$

Q2) $27 \div 3 = 9$

Q3) $9 \times 4 = 36$

Q4) $7 \times 4 = 28$

Q5) $3 \times 4 = 4 \times 3$

Q6) $6 \times 4 = 3 \times 8$

Q7) $32 \div 4 = 8$

Q8) $20 \div 4 = 5$

B

Q9) a) 314

b) 201

Q10) 16

Q11) $18 \div 6 = 3$

$5 \times 3 = 15$

Q13 (581)

$242 + 97 = 339$

$339 + 242 = 581$



TERM 3 , TEST 2

A

Q1) \$71.80

Q2) \$2.60 is 2 dollars and 60 cents.

Q3) \$1.65

Q4) Book , Cap , Doll

cheapest item

Q5) \$7

Q6)

semicircle , quarter circle	✓
-----------------------------	---

Q7)

Q8)



Q9)

cuboid	✓
--------	---

Q10)



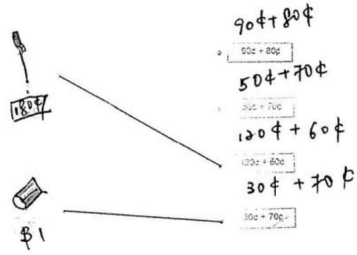
Q11) 2

Q12)

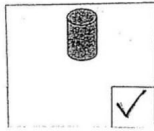
Set C	✓
-------	---



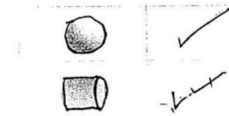
Q13,14)



Q15)



Q16)



B

Q17) (\$32)

$$10 + 10 + 6 + 6 = 32$$

THE END



ANSWER KEY

LEVEL : PRIMARY 2
SCHOOL : NAN HUA PRIMARY SCHOOL
SUBJECT : MATHEMATICS
TERM : TERM 1 REVIEW , TERM 2 TEST

TERM 1 REVIEW

A

Q1) 389

Q2) 6

Q3) 172 , 249 , 255

smallest

Q4) 496

Q5) 876

Q6) 471

Q7) 751


Q8) 346

Q9) 453

Q10) 6

B

Q11) 6



Q12) 813


C

Q13) (183)

$135 + 48 = 183$

Handwritten notes and a large watermark:

- Vertical note: 8226, 8167
- Curved note: 5589
- Large watermark: 98578229, 98578229, 98578229
- Small note: 6



Q14) (379)

$$546 - 167 = 379$$

TERM 2 TEST

Q1) $6 \times 2 = 12$

Q2) $5 \times 10 = 50$

Q3) $7 \times 5 = 35$

Q4) $20 \div 5 = 4$

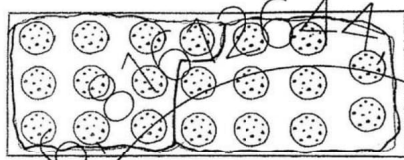
Q5) $80 \div 10 = 8$

Q6) 3×5 is the same as 5×3

Q7) $8 + 8 + 8 + 8 + 8$ is the same as 5 groups of 8.

Q8) $12 \div 2 = 6$

Q9)



Q10) $2 \times 7 = 14$

B
Q11) $2 \times 7 = 14$

Q12) $15 \div 5 = 3$

Q13) (30)

$6 \times 5 = 30$

Q14) (10)

$40 \div 4 = 10$

THE END