

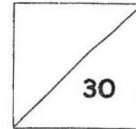
10. Fill in the box with the correct number.

$$\begin{array}{r} 587 \\ + 3\boxed{\phantom{00}}4 \\ \hline 981 \end{array}$$

11. What is the difference between 511 and 800?



HENRY PARK PRIMARY SCHOOL  
PRIMARY 2  
MATHEMATICS QUIZ 1  
NUMBERS TO 1000  
ADDITION AND SUBTRACTION



Name: \_\_\_\_\_ ( ) Date:

Class: Primary 2 \_\_\_\_\_ Parent's Signature: \_\_\_\_\_

Duration: 40 minutes


---

**Section A: Multiple-choice Questions (4 x 1 mark)**

Choose the correct answer and write its number (1, 2, 3 or 4) in the brackets provided.

1. 419 is the same as \_\_\_\_\_

- 1) Four hundred and nine
- 2) Four hundred and ninety
- 3) Four hundred and nineteen
- 4) Four hundred and ninety-nine ( )



2. In 526, the value of the digit 5 is \_\_\_\_\_.

- 1) 5
- 2) 50
- 3) 100
- 4) 500

(     )

3.  $57 + 113 =$  \_\_\_\_\_


- 1) 160
- 2) 170
- 3) 260
- 4) 683

(     )

4.  $844 - 133 =$  \_\_\_\_\_

- 1) 711
- 2) 771
- 3) 971
- 4) 977

(     )



**Section B: Open-ended Questions (14 marks)**

Fill in the correct answers in the spaces provided.

Questions 5 to 8 carry 1 mark each and Questions 9 to 13 carry 2 marks each.


5. 2 hundreds 4 tens = \_\_\_\_\_

6. Jane draws 25 circles and 46 triangles. How many more triangles than circles does she draw?

Tick ( ✓ ) the box next to the equation which matches the story.

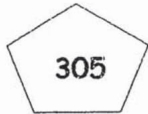
$46 + 25 = 71$

$46 - 25 = 21$



7. The sum of 352 and 148 is \_\_\_\_\_.

8. Arrange the numbers in order. Begin with the smallest.



\_\_\_\_\_

smallest

9. 10 less than 502 is \_\_\_\_\_.



12. Timmy has 4 number cards.




- a) Form the smallest 3-digit even number.  
Each card can be used once only.

- b) Form the greatest 3-digit number between 800 and 860.  
Each card can be used once only.

13. Study the number pattern carefully.  
What is the missing number?






**Section C: Problem Sums (3 x 4 marks)**

**Do these sums carefully. You may use models to help you.  
Show all your equations and workings clearly in the spaces  
provided.**

14. Mdm Tan sold 157 plates of fried rice on Saturday.  
She sold 208 plates of fried rice on Sunday.  
How many plates of fried rice did she sell on both days?

Working


She sold \_\_\_\_\_ plates of fried rice on both days.



15. Mrs Lim baked 205 cookies on Tuesday.  
She baked 48 fewer cookies on Wednesday than on Tuesday.  
How many cookies did Mrs Lim bake on Wednesday?

Working


She baked \_\_\_\_\_ cookies on  
Wednesday.



16. There were 283 men, 305 women and 368 children at a funfair. How many people were there at the funfair?

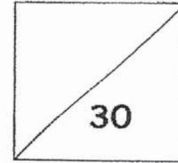
Working

There were \_\_\_\_\_ people at the funfair.





HENRY PARK PRIMARY SCHOOL  
MATHEMATICS  
PRIMARY 2  
QUIZ 1



Name: \_\_\_\_\_ (      )      Parent's Signature \_\_\_\_\_

Class: Primary 2 \_\_\_\_\_

Date: \_\_\_\_\_      Duration : 40 minutes

**Section A: Multiple Choice Questions (Total: 4 marks)**


Choose the correct answer and write its number in the brackets provided.

1. What is the numeral for six hundred and twenty-eight?

- 1) 28
  - 2) 68
  - 3) 628
  - 4) 682
- (      )

2. In 973, the value of the digit '7' is \_\_\_\_\_.

- 1) 7
  - 2) 70
  - 3) 73
  - 4) 700
- (      )



3.  $831 + 58 = \underline{\hspace{2cm}}$

- 1) 773
- 2) 827
- 3) 888
- 4) 889

(     )

4.  $434 - 117 = \underline{\hspace{2cm}}$

- 1) 217
- 2) 317
- 3) 327
- 4) 323

(     )



Section B: Open - Ended Questions (14 marks)

Question 5 to 8 carry 1 mark each. Question 9 to 13 carry 2 marks each. Fill in your answers in the boxes provided.

5. Look at the numbers below.

938

279


761

The even number is

6. Add 360 to 525.

7. Subtract 361 from 663.

8. In 593, the digit  is in the tens place.



9. Write the numbers in words.

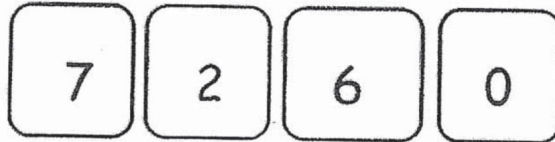
a)	48	
b)	297	

10. The sum of 297 and 304 is

11. The difference between 428 and 894 is




12. Use three of the cards below to form numbers between 100 and 1000.



a) What is the greatest 3-digit number formed?

b) What is the smallest 3-digit number formed?

13. Fill in the missing numbers.





**Section C: Problem Solving Questions (12 marks)**

Question 14 to 16 carry 4 marks each. Read each question carefully.

Show your equations and workings clearly in the spaces provided.

14. Mrs Ling baked 345 pineapple tarts and 456 chocolate tarts for Chinese New Year. How many tarts did she bake altogether?


Working

She baked \_\_\_\_\_ tarts altogether.

15. Yen's grandparents gave her \$388 for her birthday. She spent \$97 on a pair of shoes and saved the rest. How much money did Yen save?

Working

Yen saved \$\_\_\_\_\_.





16. There are 863 passengers on a plane. 354 are men, 165 are children and the rest are women. How many women are there on the plane?

Working

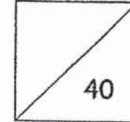
There are \_\_\_\_\_ women on the plane.

-END OF PAPER-





HENRY PARK PRIMARY SCHOOL  
MATHEMATICS  
PRIMARY 2 (TERM 2)  
TOPICAL QUIZ 2



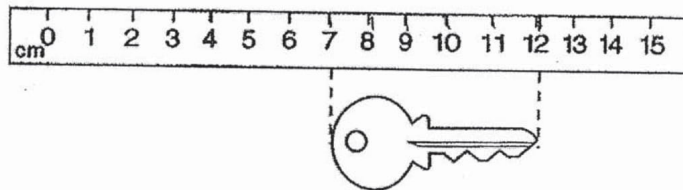
Name: \_\_\_\_\_ ( )

Class: Pr 2 \_\_\_\_\_ Parent's Signature: \_\_\_\_\_

Duration: 55 min

Section A : Multiple Choice Questions (6 x 1 mark = 6 marks)

Choose the correct answer and write its number in the brackets provided.



- (1) 5 cm
- (2) 7 cm
- (3) 10 cm
- (4) 12 cm

( )

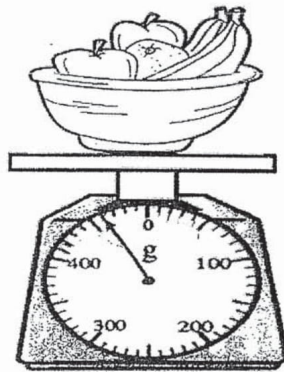


2. The length of a spoon is about \_\_\_\_\_.

- (1) 15 m
- (2) 15 cm
- (3) 150 m
- (4) 150 cm

( )

3. Look at the picture below.



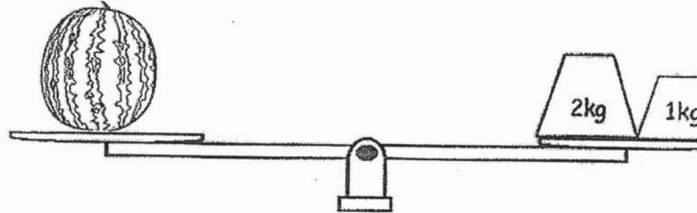
What is the mass of the basket of fruits?

- (1) 406 g
- (2) 460 g
- (3) 510 g
- (4) 560 g

( )



4. What is the mass of the watermelon in the picture shown below?



What is the mass of the watermelon in kilograms?

- (1) 6 kg  
(2) 2 kg  
(3) 3 kg  
(4) 4 kg ( )
5. Which is the same as 3 groups of 6?
- (1)  $3 + 6$   
(2)  $3 \times 6$   
(3)  $3 + 3 + 3 + 3 + 3 + 3$   
(4)  $6 + 6 + 6 + 6 + 6 + 6$  ( )
6. 7 twos = \_\_\_\_\_
- (1) 5  
(2) 9  
(3) 14  
(4) 21 ( )



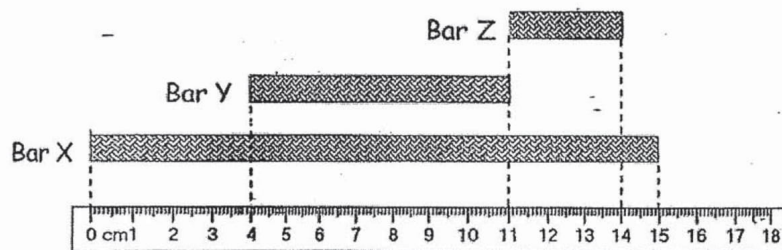
Section B : Open - Ended Questions

Questions 7 to 14 carry 1 mark each. ( $8 \times 1$  mark = 8 marks)

Questions 15 to 21 carry 2 marks each. ( $7 \times 2$  marks = 14 marks)

Fill in your answers in the boxes provided.

Look at the picture below and answer questions 7 and 8.


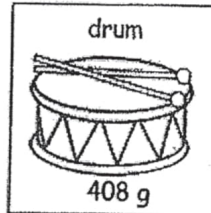
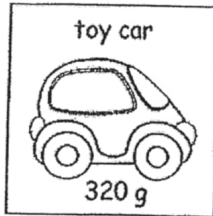


7. What is the length of Bar Y?

8. Bar Z is \_\_\_\_\_ cm shorter than Bar X.

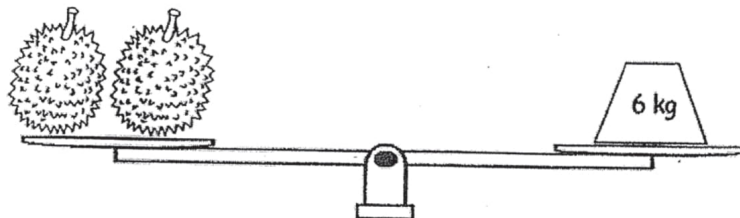


9. Arrange the objects in the boxes shown below according to their masses. Write the names of the objects in the boxes provided, beginning with the heaviest object.



heaviest

10. The two durians have the same mass. What is the mass of each durian?



kg



11. Look at the following picture.

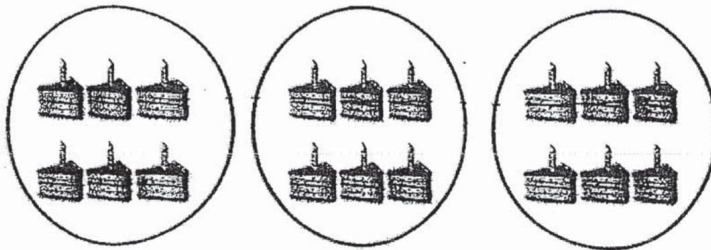
Complete the multiplication sentence.



$$\underline{\hspace{2cm}} \times \underline{\hspace{2cm}} = \underline{\hspace{2cm}}$$

12. Look at the following picture.

Complete the division equation.



$$\underline{\hspace{2cm}} \div \underline{\hspace{2cm}} = \underline{\hspace{2cm}}$$



13. Fill in the box with 'g' or 'kg'.

The mass of a cat is about 4

14. 5 children share 20 cupcakes equally.

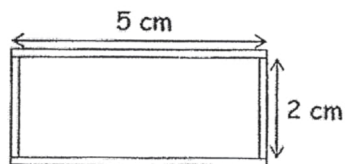
How many cupcakes does each child get?


Circle to show your answer.



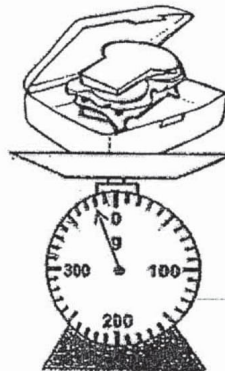
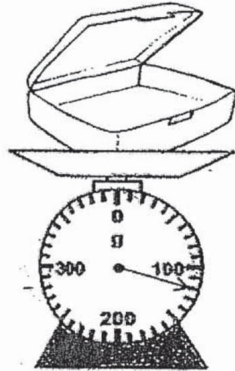
15. Alex used 4 rods to form the rectangle below.

What is the total length of the 4 rods?







16. Andy packs a sandwich into his empty lunch box. What is the mass of the sandwich?



17. Each chicken has 2 legs. How many legs does 7 chickens have?





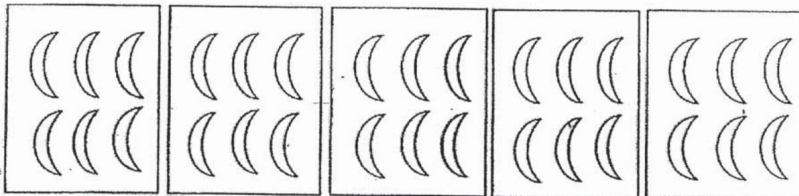
18. The chart shows the height of 4 pupils.

Name	Height
Colin	129 cm
Esther	137 cm
David	152 cm
Susan	131 cm

David is taller than the shortest pupil by \_\_\_\_\_ cm.

 cm


19. Study the pictures below carefully.



Write one multiplication and one division equation for the picture.

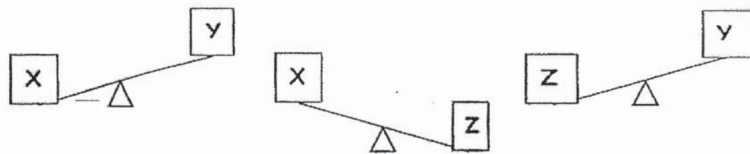
$$\square \times \square = \square$$

$$\square \div \square = \square$$



20. Jane had 15 biscuits. She placed the biscuits equally onto 3 plates.  
How many biscuits were there on each plate?

21. Study the pictures below carefully.



Which box is the lightest?



Section C: Word Problems (3 x 4 marks = 12 marks)

Questions 22 to 24 carry 4 mark each. Read each question carefully.  
Show all your Math equations and word statements clearly in the spaces provided.

22. Julie used 325g of flour to bake some cookies.  
After baking the cookies, she had 487g of flour left.  
How much flour did Julie have at first?

Julie had \_\_\_\_\_

23. Sam collected 32 picture cards.  
He arranged the cards equally on 4 pages of an album.  
How many cards were there on each page?

There were \_\_\_\_\_

Working



24. Jane is 135 cm tall.  
Jane is 28 cm taller than Alice.  
How tall is Alice?

Working

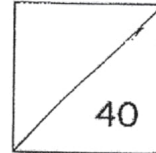
Alice is \_\_\_\_\_

---

End of paper



HENRY PARK PRIMARY SCHOOL  
MATHEMATICS  
PRIMARY 2 (TERM 3)  
TOPICAL QUIZ 4



Name: \_\_\_\_\_ ( ) Date: \_\_\_\_\_

Class: Pr 2 \_\_\_\_\_ Parent's Signature: \_\_\_\_\_

Section A: Multiple Choice Questions (4 x 1 mark = 4 marks)

Choose the correct answer and write its number in the brackets provided.

1. 325¢ is the same as \_\_\_\_\_.


- (1) \$3.25
- (2) \$32.05
- (3) \$32.50
- (4) \$325

( )

2. 25¢ and \_\_\_\_\_ make \$1.00.

- (1) 75¢
- (2) 100¢
- (3) 125¢
- (4) 130¢

( )



3.  $6+6+6+6+6=$  \_\_\_\_\_

(1)  $5 \times 6$

(2) 6 fives

(3) 6 groups of 5

(4) 36

( )

4. How many corners does a rectangle have?

(1) 1

(2) 2

(3) 3

(4) 4

( )



Section B: Open - Ended Questions


Questions 5 to 14 carry 1 mark each. Questions 15 to 19 carry 2 marks each. Fill in your answers in the boxes provided.

5. Circle the correct amount of money to show \$3.65.



6.  $30¢ + \$0.90 =$  \_\_\_\_\_

\$



7. What is the total amount of money in the box?

\$ 2





\$

8. Share 18 sweets equally among 6 children.

How many sweets does each child get?

Circle to show your groupings.

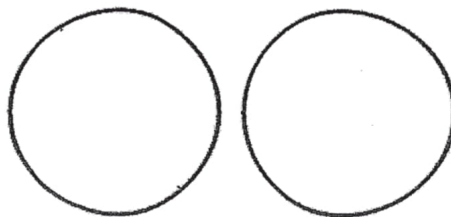





9. 8 fours = \_\_\_\_\_

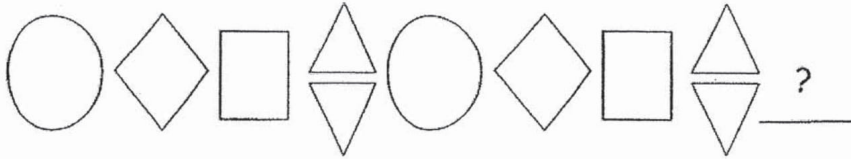
10. I have 3 sides. None of my sides are curved lines. What shape am I?

11. How many semicircles make 2 circles?

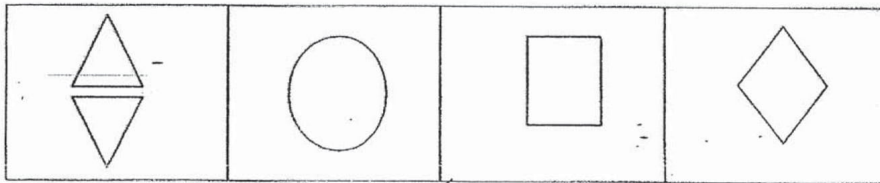





12.




Circle the next shape.




13.



Circle the next shape.





14. Denise has 1 fifty-cent coin, 2 twenty-cent coins and 5 ten-cent coins in her purse. How much money does she have? (Give your answers in cents only)


15.

Chair A



\$46.70

Chair B



\$49.90

Chair C




\$49.75

- a) Which chair costs the most?


Chair \_\_\_\_\_

- b) Arrange the chairs in order, beginning with the cheapest.


Chair \_\_\_\_\_, Chair \_\_\_\_\_, Chair \_\_\_\_\_




16. Look at the pictures given below. Write the multiplication and division equations in the box provided.



_____	x	_____	=	_____
_____	x	_____	=	_____
_____	÷	_____	=	_____
_____	÷	_____	=	_____



17. Count the number of square(s) and triangle(s) used to form the picture below.




square(s)

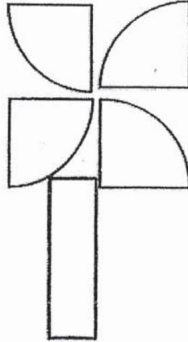
triangle(s)


18. Keith helped Mr Teo tidy up the PE room by putting 36 balls into 4 baskets. How many balls were there in one basket?

balls



19. Write the names of the shapes that you can find in the figure below.





Section C: Word Problems

Questions 20 to 23 carry 4 marks each.


Read each question carefully. Show your equations and word statements clearly in the spaces provided.

20. Amy bought two marbles and a paper aeroplane for 85¢.

A marble costs \$0.20.

How much did the paper aeroplane cost?

Working



21. There are 6 eggs in one tray. Mrs Lee buys 4 trays of eggs to bake for a funfair. How many eggs does Mrs Lee need?


Working

---

22. Jerry went to a bookstore and bought two items.  
He bought a pencil case for \$13 and a storybook for \$18.  
He gave the cashier a fifty-dollar note.  
How much change did he receive?

Working

---



23. Jenny had 31 fiction books and 49 non-fiction books.

a) How many books did Jenny have altogether?

Working

---

23. Jenny packed all her books equally onto 8 shelves.



b) How many books were there on each shelf?


Working

---


- End of Paper -

Setters: Ms Ferlicia Lim, Mrs Mona Leong & Mdm Faaizah






2  
ARK PRIMAR  
ATICS  
IATICS QUI



- Q5) 240
- Q6)  $[46 - 25 = 21]$
- Q7) 500
- Q8) 305, 351, 612, 877  
smallest
- Q9) 492
- Q10) 9
- Q11) 289
- Q12) a) 308, b) 837
- Q13) 159
- SECTION C
- Q14) (365)  
 $208 + 157 = 365$
- Q15) (157)  
 $205 - 48 = 157$
- Q16) (956)  
 $368 + 305 = 673$   
 $673 + 283 = 956$

Handwritten text around a large circle:

1612644, 938588, 796 Fran Deliver



# ANSWER SHEET

SCHOOL : HENRY PARK PRIMARY SCHOOL

SUBJECT : MATHEMATICS

TERM : CA1

Q1	Q2	Q3	Q4						
3	2	4	2						

Q5) 938

Q6) 885

Q7) 302

Q8) 9

Q9) (a) forty-eight

(b) two hundred and ninety-seven

Q10) 601

Q11) 466

Q12) (a) 762

(b) 206

Q13) 281, 279, 277, 275, 273, 271

Q14)  $456 + 345 = 801$

She baked 801 tarts altogether.


Q15)  $388 - 97 = 291$

Yen saved \$291.

Q16)  $165 + 354 = 519$

$863 - 519 = 344$

There are 344 women on the plane.



# ANSWER SHEET

SCHOOL : HENRY PARK PRIMARY SCHOOL

SUBJECT : MATHEMATICS

TERM : SA1

Q1	Q2	Q3	Q4	Q5	Q6				
1	2	2	3	2	3				

Q7) 7 cm

Q8) 12 cm

Q9) drum , toy car , teddy bear


Q10) 3 kg

Q11)  $2 \times 8 = 16$

Q12)  $18 \div 3 = 6$

Q13) kg

Q14)



Q15) 14 cm


Q16) 260 g

Q17) 14 legs

Q18) 23 cm

Q19)  $5 \times 6 = 30$

$30 \div 5 = 6$



Q20) 5

Q21) Box Y

Q22)  $487\text{g} + 325\text{g} = 812\text{g}$


Julie had 812g of flour at first.

Q23)  $32 \div 4 = 8$

There were 8 cards in each page.

Q24)  $135 - 28 = 107$

Alice is 107cm tall.



# ANSWER SHEET

SCHOOL : HENRY PARK PRIMARY SCHOOL

SUBJECT : MATHEMATICS

TERM : CA2

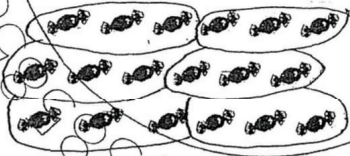
Q1	Q2	Q3	Q4					
1	1	1	4					

Q5) \$1, \$1, \$1, \$0.50, \$0.10, \$0.05

Q6) \$1.20

Q7) \$20.25

Q8)



Q9) 32

Q10) tr e

Q11) 4

Q12) circle


Q13)



Q14) 140¢

Q15) (a) Chair B

(b) Chair A, Chair C, Chair B



Q16)  $4 \times 3 = 12$   
 $3 \times 4 = 12$   
 $12 \div 3 = 4$   
 $12 \div 4 = 3$

Q17) 3 square(s)  
4 triangle(s)

Q18)  $36 \div 4 = 9$  balls

Q19) rectangle  
quarter circles

Q20)  $\$0.20 + \$0.20 = \$0.40$   
 $\$0.85 - \$0.40 = \$0.45$   
The paper aeroplane cost \$0.45.

Q21)  $6 \times 4 = 24$   
Mrs Lee needs 24 eggs.

Q22)  $18 + 13 = 31$   
 $50 - 31 = 19$   
Jerry received \$19 change.

Q23) (a)  $31 + 49 = 80$   
Jenny has 80 books altogether.

(b)  $80 \div 8 = 10$   
There are 10 books on each shelf.