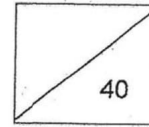




CHIJ ST NICHOLAS GIRLS' SCHOOL
 PRIMARY 2
 TERM 3 REVISION PAPER 3
 MATHEMATICS
 2019



Duration: 50 minutes

Name: _____ ()

Date: 21 August 2019


Class: Primary 2 _____

Parent's Signature: _____

	Topics assessed	Level 4 All the time	Level 3 Most of the time	Level 2 Some of the time	Level 1 Seldom or Not at all
1	<u>Two-Step Word Problems: Addition and Subtraction</u> - Able to solve two-step word problems involving addition and subtraction				
2	<u>Mass</u> - Able to read the scale of a weighing machine to determine the masses of objects in kilograms (kg) or grams (g) - Able to estimate mass and use the word 'about' to describe the estimation - Able to compare and find the mass(es) of object(s) placed on a balance - Able to compare and order the masses of objects in grams (g) - Able to solve one-step and two-step word problems involving mass				
3	<u>Money</u> - Able to count, read and write an amount of money in dollars and cents in decimal notation - Able to make up a given amount of money in different ways - Able to convert an amount of money in decimal notation to cents only and vice versa - Able to compare two or three amounts of money				



	Topics assessed	Level 4 All the time	Level 3 Most of the time	Level 2 Some of the time	Level 1 Seldom or Not at all
4	<u>Two-Dimensional and Three-Dimensional Figures</u> - Able to identify the shapes that make up a given figure - Able to identify and count flat surfaces of a given solid - Able to complete a pattern with 2D or 3D shapes according to one or two attributes (sizes, shape, colour and orientation)				
5	<u>Fractions</u> - Able to interpret a fraction as part of a whole				

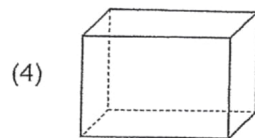
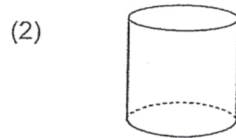


Section A (6 x 1 mark = 6 marks)

Read each question carefully and choose the correct answer.

Write the number of the correct answer (1, 2, 3 or 4) in the brackets provided.

1. Which of the following solids has 6 flat faces?

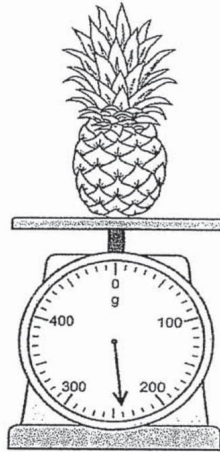


()

Workings



2. What is the mass of the pineapple?



- (1) 204 g
- (2) 240 g
- (3) 306 g
- (4) 360 g

()

3. The mass of a Singapore \$1 coin is about _____.



- (1) 8 g
- (2) 8 kg
- (3) 80 kg
- (4) 800 g

()

Workings



4. $\frac{7}{9}$ and _____ make 1 whole.

(1) $\frac{1}{9}$

(2) $\frac{2}{9}$

(3) $\frac{3}{9}$

(4) $\frac{9}{9}$

()

5. \$4.50 = _____ ¢

(1) 45

(2) 405

(3) 450

(4) 4050

()

6. There are 8 girls and 15 boys in Class A. There are 35 children in class B. How many more children are there in Class B than in Class A?

(1) 12

(2) 20

(3) 23

(4) 58

()

Workings



Section B (24 marks)



Questions 7 to 10 carry 1 mark each.

Questions 11 to 20 carry 2 marks each

Write your answers in the blanks provided.


Show all mathematical equations and workings clearly in the space provided.

7. Look at the pictures below.
Fill in the blanks with the letters A, B or C.



_____ is heavier than _____ but lighter than

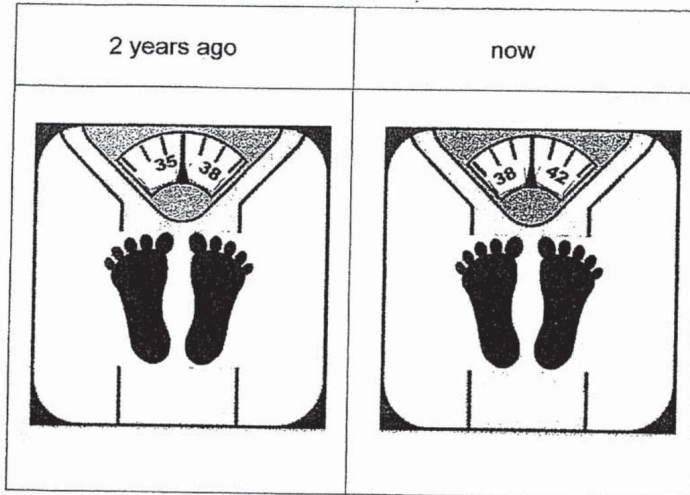
Workings



8. Study the 2 weighing scales below.

The weighing scales show the mass of a boy two years ago and now. How much heavier is he now as compared to 2 years ago?

Workings



Answer: _____ kg




9. Write the amount of money shown below.

Workings



Answer: \$ _____



10. Which figure is made up of 2 triangles, 2 quarter circles and 2 rectangles?

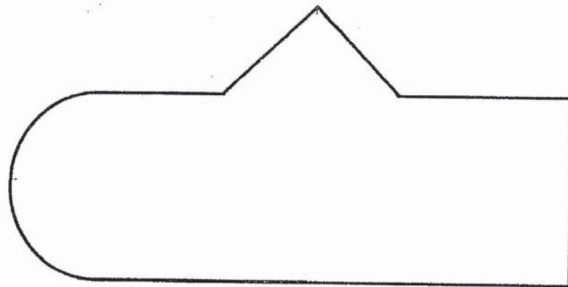


Figure 1





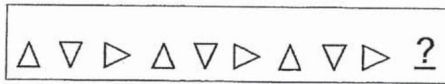
Figure 2

Answer: Figure _____

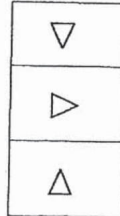
Workings



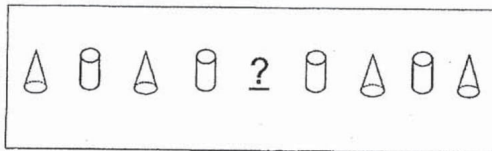
11. (a) Circle the shape that comes next.




Answer:




(b) What is the missing solid? Circle the solid.



Answer:

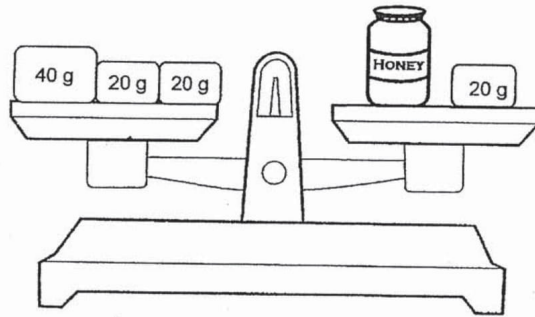


Workings



12. The mass of the jar of honey is _____.

Workings

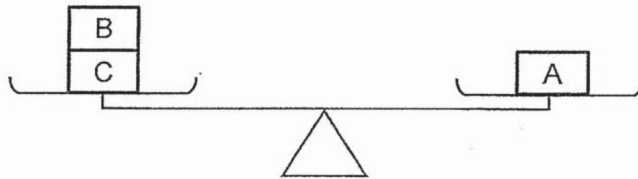
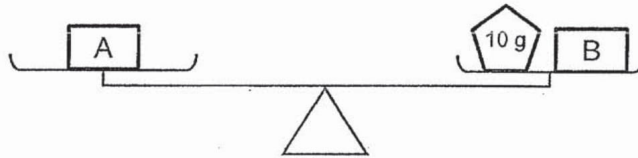
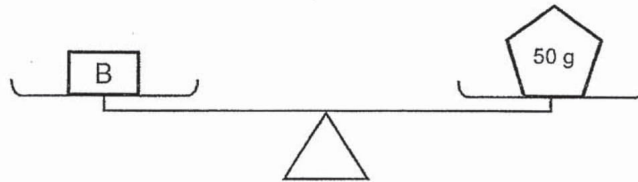


Answer: _____ g




13. Study the diagrams below.
Put a tick (✓) next to the correct statement(s).

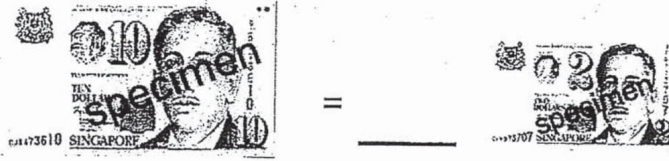
Workings



Statements	Tick (✓)
Object C is the lightest.	
The mass of object A is 60 g.	
The mass of object C is the same as B.	



14. Fill in the blank with the correct answer.



Workings

15. Write the amount of money given in figures below.

(a)	eighty dollars and eight cents	\$ _____
(b)	forty - five cents	\$ _____

16. Count the amount of money in each set. Then, arrange the sets of money from the smallest to the greatest.

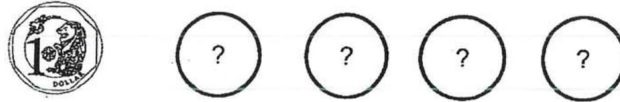
 A	 B	 C
-------	-------	-------

_____ , _____ , _____
smallest



17. Willy has the following coins in his pocket.
He needs 4 more coins to make \$4.00.
The value of each missing coin is the same.

Workings




Which of the following coins shows the value of each missing coin?

Circle the correct coin.



18. Fill in the blanks.

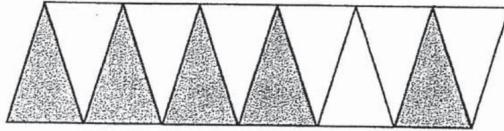


_____ out of _____ equal parts are shaded.

_____ of the figure is shaded.





19. How many more parts must be shaded in the figure below to make $\frac{11}{12}$?



Answer: _____

20. Which figure is $\frac{1}{5}$ shaded? Tick (✓) your answer in the correct box.



Workings



Section C (10 marks)

Question **21** and **22** carry 3 marks each.

Question **23** carries 4 marks.

Write your answers in the blanks provided.

Show all number equations and workings clearly in the space provided.

21. Greg bought 24 kg of flour.
He puts the flour equally into some bags.
Each bag of flour weighed 4 kg.
How many bags of flour were there?

Workings

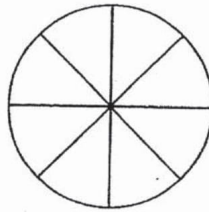
Answer: _____



22. Sam cut a pizza into 8 equal pieces as shown below. He ate 2 pieces of the pizza. His sister ate 1 piece of the pizza.


Workings

- (a) Shade the figure below to show the total number of pieces of pizza that was eaten by Sam and his sister.



- (b) What fraction of the pizza was left?

Answer: _____




23. June had 400 buttons at first.
She gave 107 of the buttons to her brother.
Her father then gave her another 78 buttons.
How many buttons does June have now?

Workings

Answer: _____

End of Paper



Dr.Kenny Education



ANSWER KEY

YEAR : 2019
LEVEL : PRIMARY 2
SCHOOL : CHIJ ST NICOLAS GIRL'S SCHOOL
SUBJECT :
TERM : TERM 3

SECTION A

Q1	4	Q2	2	Q3	1
Q4	2	Q5	3	Q6	1

SECTION B

Q7 C is heavier than B but lighter than

Q8 4kg

Q9 \$13.60

Q10 Figure 1

Q11 (a)

(b)

Q12 60g

Q13 Object C is the lightest

The mass of object A is 60

Q14 5

Q15 (a)\$80.08

(b)\$0.45

Q16 A,C,B

Q17 20cents



Q18 2 out of 6 equal parts are shaded.

$$\frac{2}{6}$$

Q19 6

Q20



Q21 6

Q22 $\frac{5}{8}$ (b)

Q22(a)



Q23 371

2
371